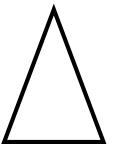
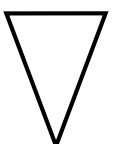
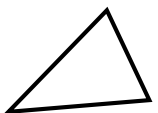


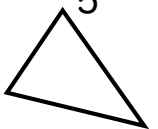

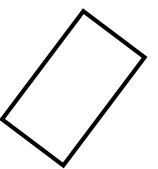

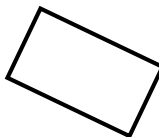
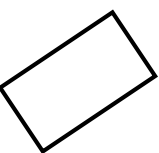

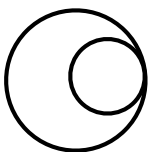
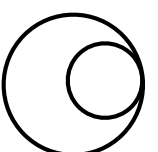
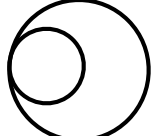

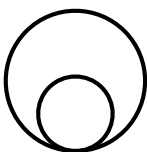
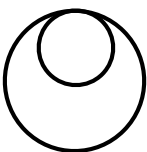

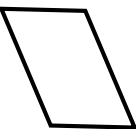
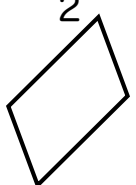

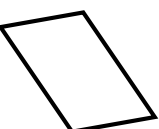
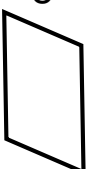

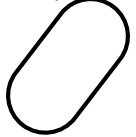

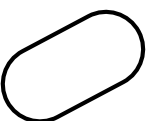




以下の、左側のターゲット図形と同じ向き（向き）の図形に印（✓）を付けてください。

ターゲット図形

選択肢

①		1 	2 	3 	4 	5 
②		1 	2 	3 	4 	5 
③		1 	2 	3 	4 	5 
④		1 	2 	3 	4 	5 
⑤		1 	2 	3 	4 	5 

折り線

非言語的機能-視知覚：図形と図形の対応 抽象図形 同じ向き（向き）の図形 A その3

答え ①：4 ②：2 ③：1 ④：3 ⑤：5